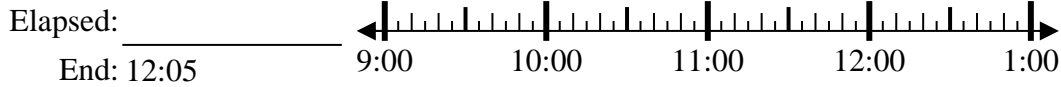




Solve each problem.

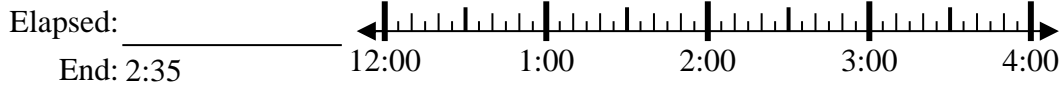
Answers

1) Start: 9:35



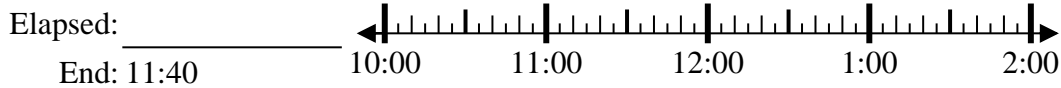
1. \_\_\_\_\_

2) Start: 12:50



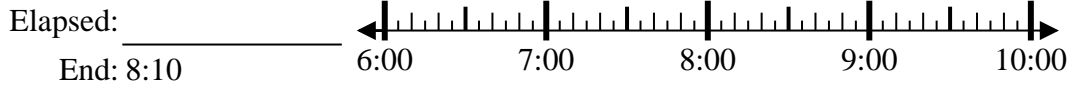
2. \_\_\_\_\_

3) Start: 10:15



3. \_\_\_\_\_

4) Start: 6:25



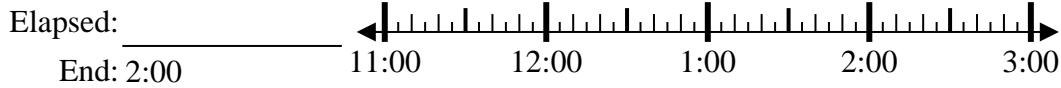
4. \_\_\_\_\_

5) Start: 9:10



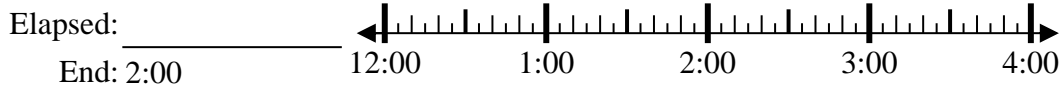
5. \_\_\_\_\_

6) Start: 11:45



6. \_\_\_\_\_

7) Start: 12:20



7. \_\_\_\_\_

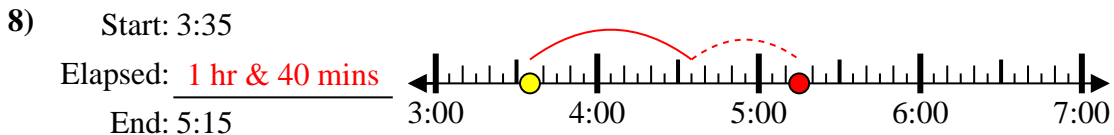
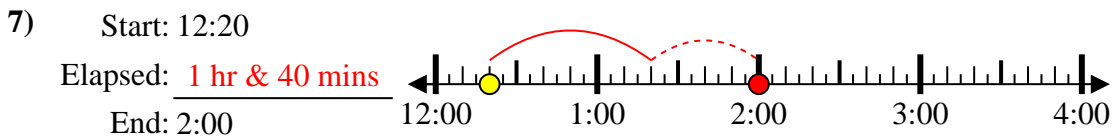
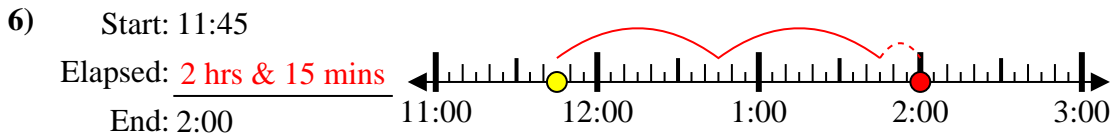
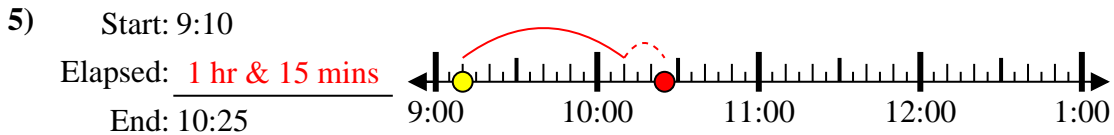
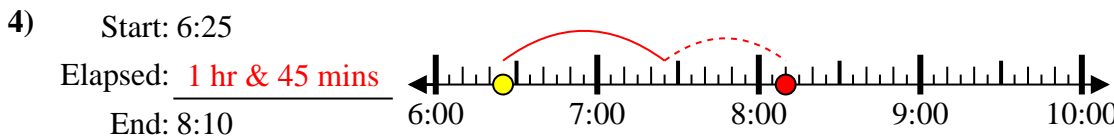
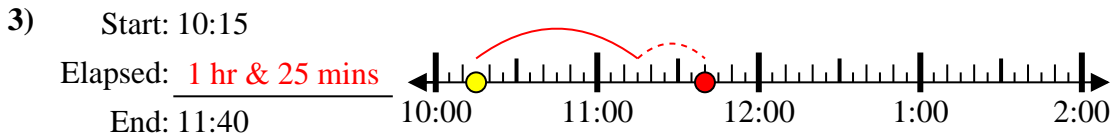
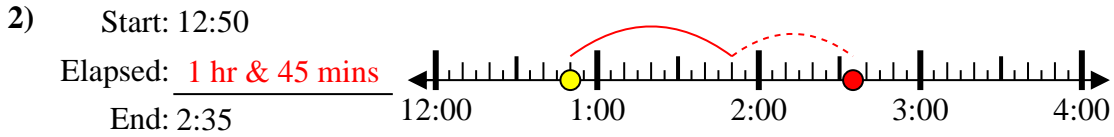
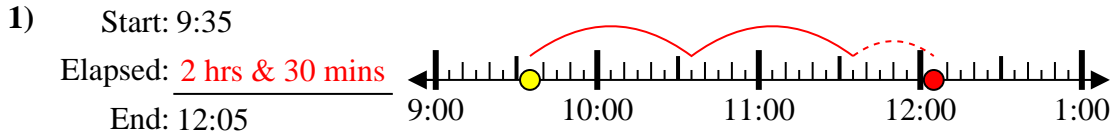
8) Start: 3:35



8. \_\_\_\_\_



Solve each problem.



Answers

1. 2 hrs & 30 mins

2. 1 hr & 45 mins

3. 1 hr & 25 mins

4. 1 hr & 45 mins

5. 1 hr & 15 mins

6. 2 hrs & 15 mins

7. 1 hr & 40 mins

8. 1 hr & 40 mins